



DOMINÓ MATEMÁTICO

QUAL A SOMA DOS DOMINÓS?




$$3 + 3 =$$

$$6$$




$$_ + _ =$$

$$_$$




$$_ + _ =$$

$$_$$




$$_ + _ =$$

$$_$$




$$_ + _ =$$

$$_$$



$$_ + _ =$$

$$_$$



$$_ + _ =$$

$$_$$

NOME: _____

DATA: **03/08/2021**

JARDIM II - Prof.^a _____